

Name: _____ Class: _____

Living and non-living things


Determine if the following are living or non living.



Living Non living



Living Non living



Living Non living



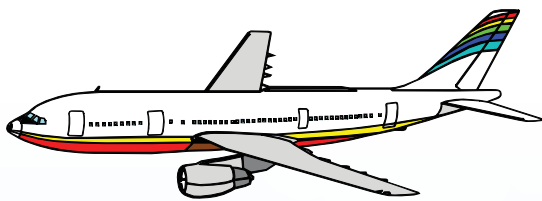
Living Non living




Living Non living



Living Non living



Living Non living



Living Non living